

Iso vai Pieni?

Ympyröi suuri esine jokaisessa ruudussa!

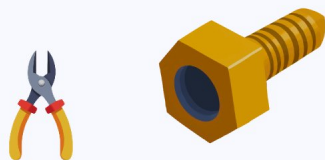
1




2




3



4



5



6



7



8

