



Jaa osiin

Nimi: _____ Päivämäärä: _____


★ Jaa kasa tasan laatikoihin. Kirjoita, montako kukin saa.

1




$$15 \div 3 = \square$$

2




$$9 \div 3 = \square$$

3



$$20 \div 4 = \square$$

4



$$16 \div 4 = \square$$