

# Dominolasku

Nimi: \_\_\_\_\_ Päivämäärä: \_\_\_\_\_


★ Laske dominon molemmat puolet. Kirjoita summa.

1



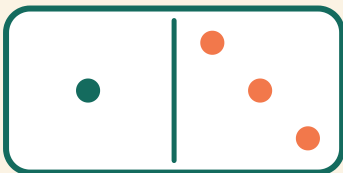
$$6 + 6 = \square$$

2




$$4 + 3 = \square$$

3



$$1 + 3 = \square$$

4



$$2 + 6 = \square$$