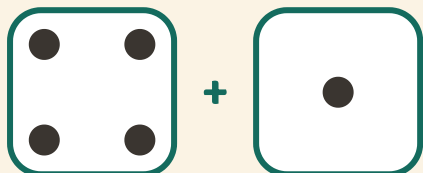


Heitä ja laske yhteen

Nimi: _____ Päivämäärä: _____

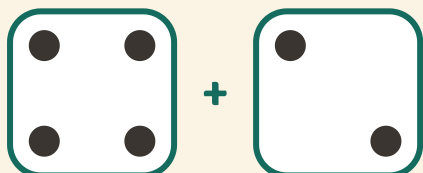
★ Laske molempien noppien pisteet. Kirjoita summa.

1




$4 + 1 = \square$

2



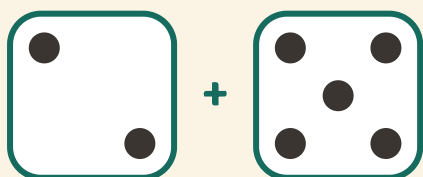
$4 + 2 = \square$

3



$3 + 2 = \square$

4



$2 + 5 = \square$