

Jaa osiin

Nimi: _____ Päivämäärä: _____



★ Jaa kasa tasan laatikoihin. Kirjoita, montako kukin saa.

1





$$20 \div 4 = \square$$

2




$$8 \div 4 = \square$$

3



$$12 \div 3 = \square$$

4



$$16 \div 4 = \square$$