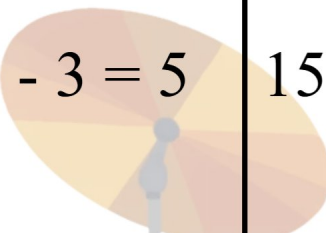

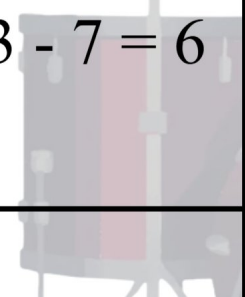
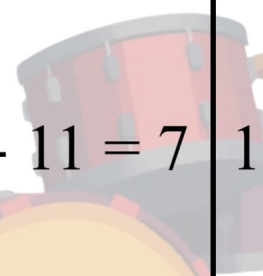

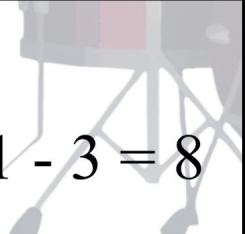
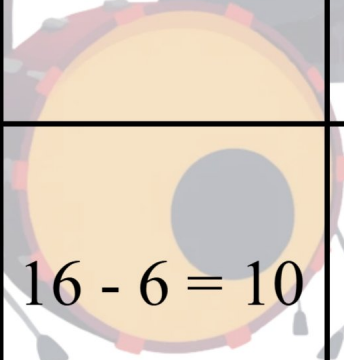
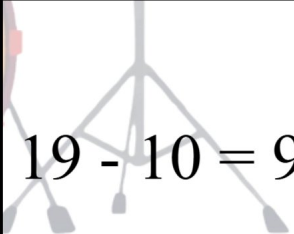


Matematiikkapulmat

Ratkaise kuvapulmat!

| | | |
|---|--|--|
|  $8 - 3 = 5$ | $15 - 12 = 3$ | $13 - 9 = 4$  |
| $13 - 7 = 6$  | $18 - 11 = 7$  | $12 - 10 = 2$  |
| $11 - 3 = 8$  | $16 - 6 = 10$  | $19 - 10 = 9$  |