

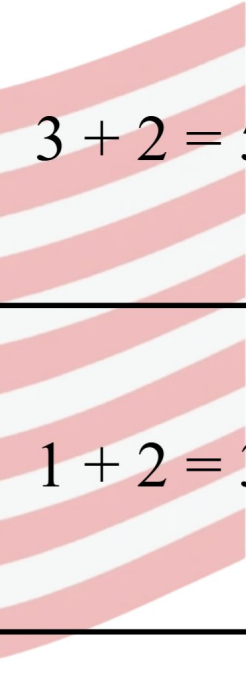


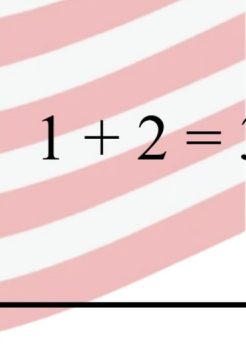

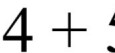



Matematiikkapulmat

Ratkaise kuvapulmat!

 $3 + 4 = 7$	 $3 + 1 = 4$	 $3 + 2 = 5$
 $1 + 1 = 2$	 $6 + 4 = 10$	 $1 + 2 = 3$
 $1 + 5 = 6$	 $4 + 5 = 9$	 $5 + 3 = 8$