




Yhtä suuret palat




Nimi: _____ Päivämäärä: _____

★ Ympyröi jokainen kuvio, joka on jaettu YHTÄ suuriin osiin.


1



2



3



4

