



Reilut osat?



Nimi: _____ Päivämäärä: _____

★ Ympyröi jokainen kuvio, joka on jaettu YHTÄ suuriin osiin.




1



2



3



4

