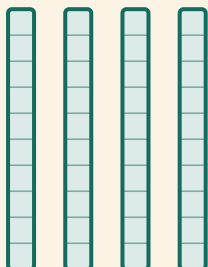


Montako kymppiä?

Nimi: _____ Päivämäärä: _____

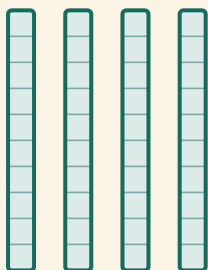
★ Laske kymppisauvat. Täydennä lasku.

1



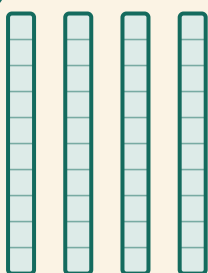
$$\square \times 10 = \square$$

2




$$\square \times 10 = \square$$

3



$$\square \times 10 = \square$$

4



$$\square \times 10 = \square$$