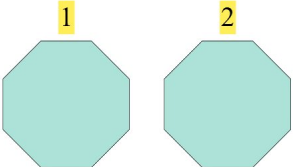


Hauska Yhteenlasku


Löydä puuttuva luku yhteenlaskun täydentämiseksi!

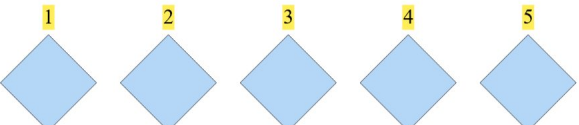
1.  + 2 = 4 $2 + 2 = 4$

2.  + 5 = 9 $4 + 5 = 9$

3.  + 3 = 5 $2 + 3 = 5$

4.  + 2 = 5 $3 + 2 = 5$

5.  + 5 = 6 $1 + 5 = 6$

6.  + 1 = 6 $5 + 1 = 6$