






Hauska Yhteenlasku


Löydä puuttuva luku yhteenlaskun täydentämiseksi!



1.  + 5 = 6 $1 + 5 = 6$

2.     + 2 = 6 $4 + 2 = 6$

3.    + 3 = 6 $3 + 3 = 6$

4.     + 4 = 8 $4 + 4 = 8$

5.  + 2 = 3 $1 + 2 = 3$

6.   + 1 = 3 $2 + 1 = 3$