












# Hauska Yhteenlasku

Laske kuvat, lisää luku ja kirjoita vastauksesi!



1.  + 4 = \_\_\_\_\_

2.     + 5 = \_\_\_\_\_

3.     + 2 = \_\_\_\_\_

4.    + 5 = \_\_\_\_\_

5.      + 4 = \_\_\_\_\_

6.   + 3 = \_\_\_\_\_