

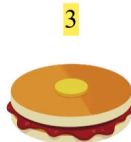







Addition Amusante

Compte les images, ajoute le nombre et écris ta réponse!







1.   **3** $1 + 3 = 4$

2.      **1** $4 + 1 = 5$

3.    **1** $2 + 1 = 3$

4.   **5** $1 + 5 = 6$

5.    **5** $2 + 5 = 7$

6.       **5** $5 + 5 = 10$