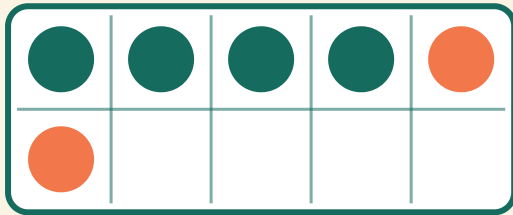


Addition sur la grille

Prénom: _____ Date: _____

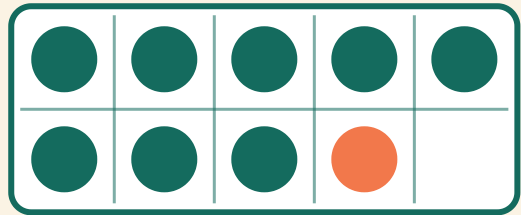
★ Compte les deux couleurs. Écris la somme de l'addition.

1



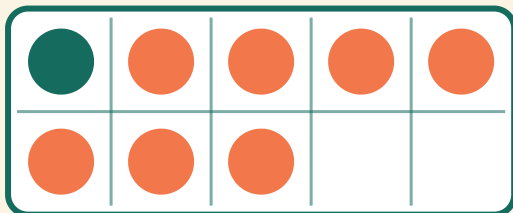
$$4 + 2 = \square$$

2



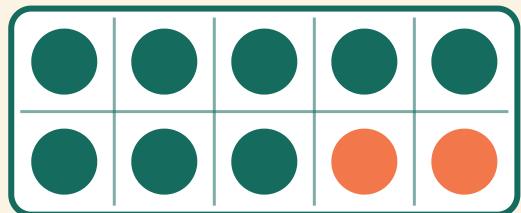
$$8 + 1 = \square$$

3



$$1 + 7 = \square$$

4



$$8 + 2 = \square$$