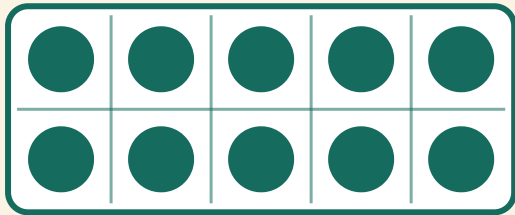


Faire 10 !

Prénom: _____ Date: _____

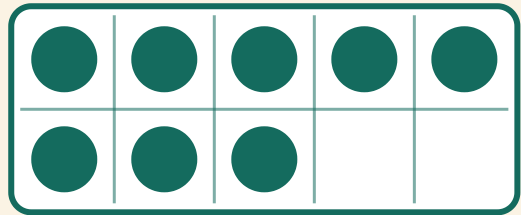
★ Combien de points en plus pour faire 10 ? Écris le nombre manquant.

1



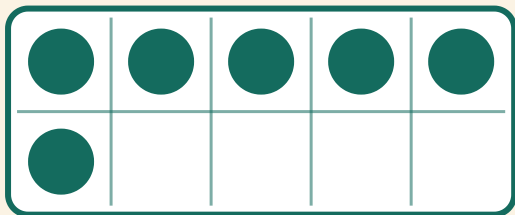
$$10 + \boxed{} = 10$$

2



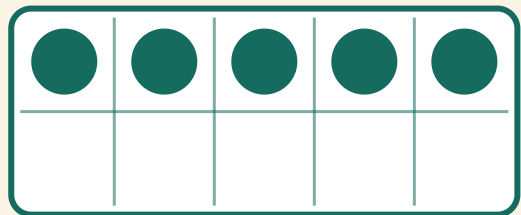
$$8 + \boxed{} = 10$$

3



$$6 + \boxed{} = 10$$

4



$$5 + \boxed{} = 10$$