

Addition d'images

Prénom: _____ Date: _____

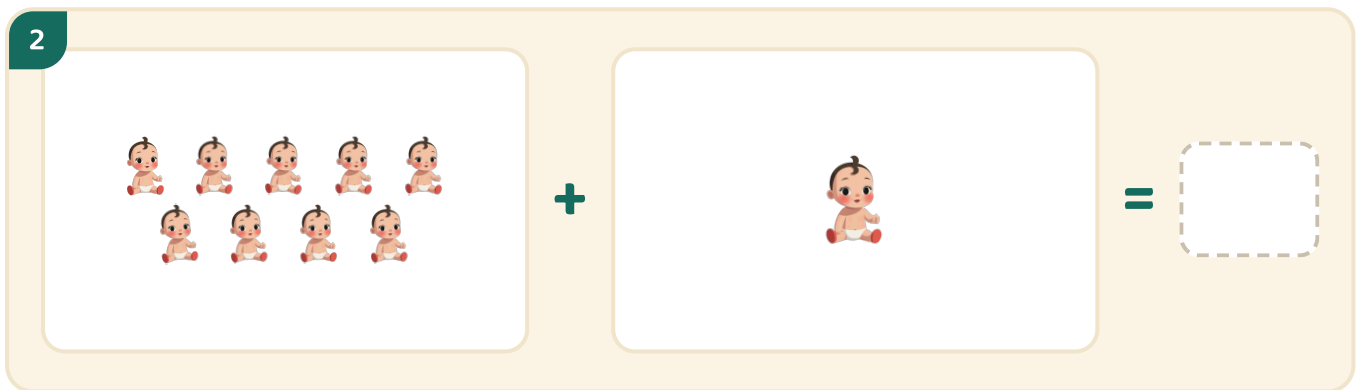
★ Compte les deux groupes. Écris combien il y en a en tout.

1




A box containing 1 blue bucket with a red handle and a yellow pile of sand. A plus sign follows. A second box contains 8 blue buckets with red handles and yellow piles of sand, arranged in two rows of four. An equals sign follows, leading to a dashed rectangular box for the answer.

2



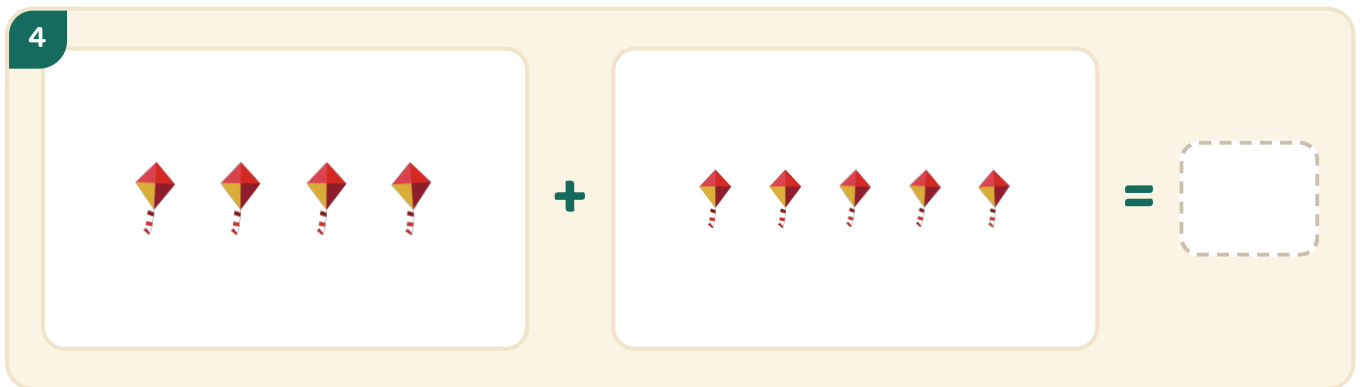
A box containing 9 cartoon babies, arranged in two rows of five and four. A plus sign follows. A second box contains 1 cartoon baby. An equals sign follows, leading to a dashed rectangular box for the answer.

3



A box containing 3 soccer balls. A plus sign follows. A second box contains 6 soccer balls, arranged in two rows of three. An equals sign follows, leading to a dashed rectangular box for the answer.

4



A box containing 4 colorful kites. A plus sign follows. A second box contains 5 colorful kites. An equals sign follows, leading to a dashed rectangular box for the answer.