


Combien de dizaines ?

Prénom: _____ Date: _____


★ Compte les barres de dix. Termine l'opération.

1



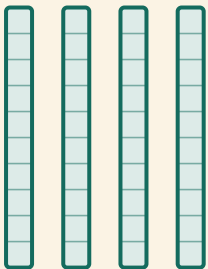
$$\square \times 10 = \square$$

2




$$\square \times 10 = \square$$

3



$$\square \times 10 = \square$$

4



$$\square \times 10 = \square$$