


# Faire une dizaine !

Prénom: \_\_\_\_\_ Date: \_\_\_\_\_




Entoure 10 unités pour grouper une dizaine. Écris combien de dizaines et d'unités.

1




$$\square \times 10 + \square$$

2




$$\square \times 10 + \square$$

3



$$\square \times 10 + \square$$

4



$$\square \times 10 + \square$$