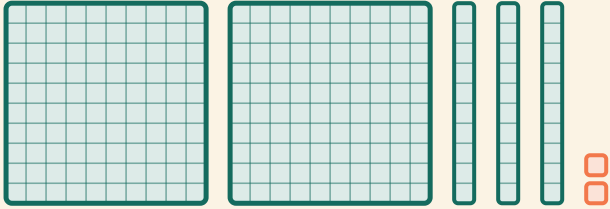


# Lire les blocs

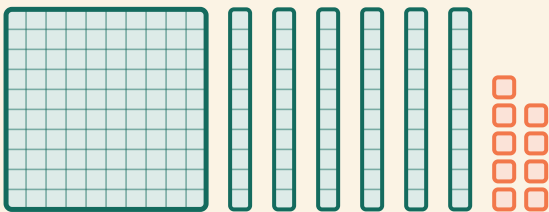
Prénom: \_\_\_\_\_ Date: \_\_\_\_\_

★ Compte les centaines, dizaines et unités. Écris le nombre qu'ils montrent.

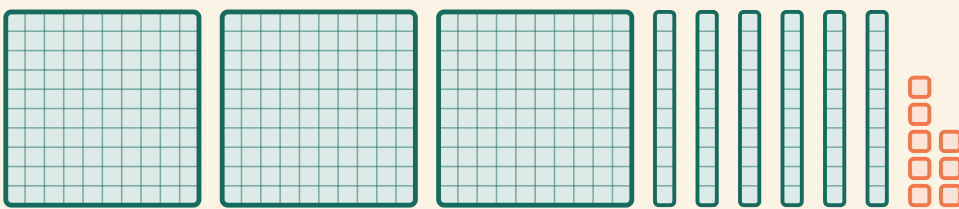
1



2



3



4

