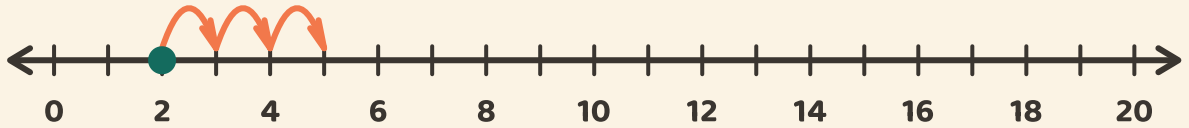


Saute sur la ligne !

Prénom: _____ Date: _____

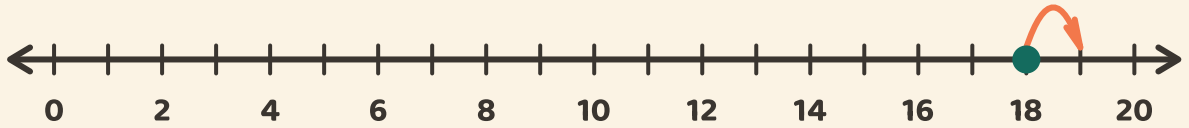
★ Pars du point. Compte les sauts. Écris le résultat de l'addition.

1



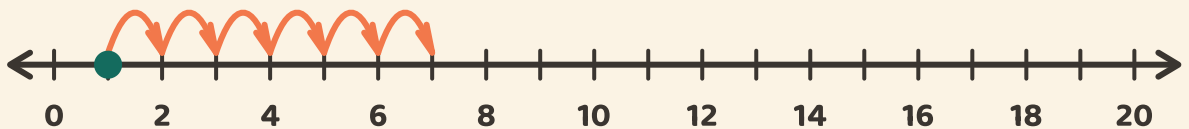
$$2 + 3 = \boxed{}$$

2



$$18 + 1 = \boxed{}$$

3



$$1 + 6 = \boxed{}$$