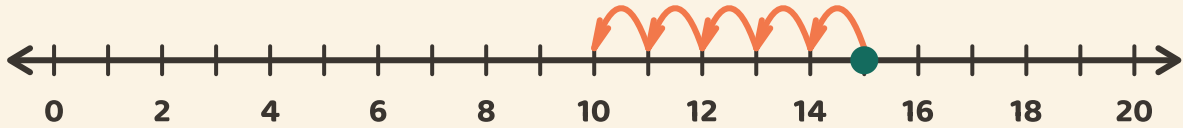


Saute en arrière

Prénom: _____ Date: _____

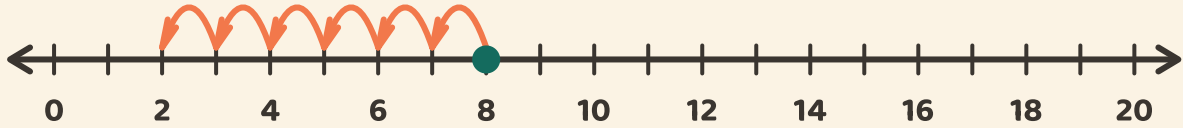
★ Suis les sauts en arrière. Écris le résultat de la soustraction.

1



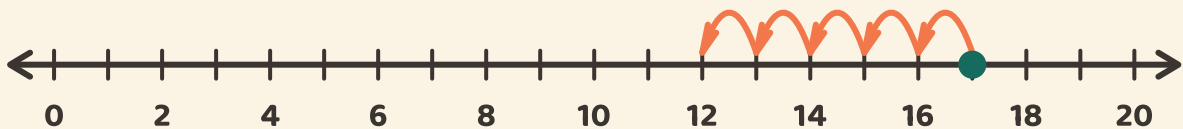
$$15 - 5 = \boxed{}$$

2



$$8 - 6 = \boxed{}$$

3



$$17 - 5 = \boxed{}$$