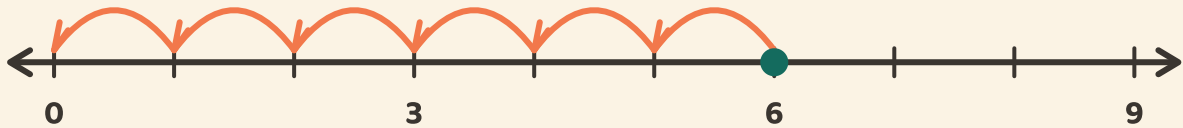


Sauter jusqu'à zéro

Prénom: _____ Date: _____

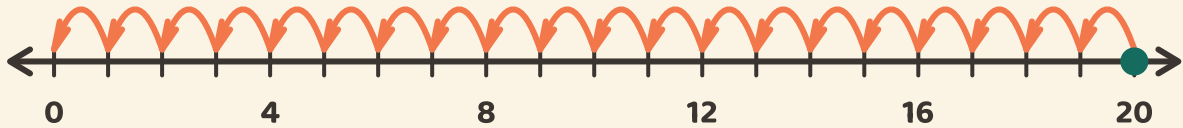
★ Compte les sauts égaux jusqu'à zéro. Écris combien de sauts il faut.

1



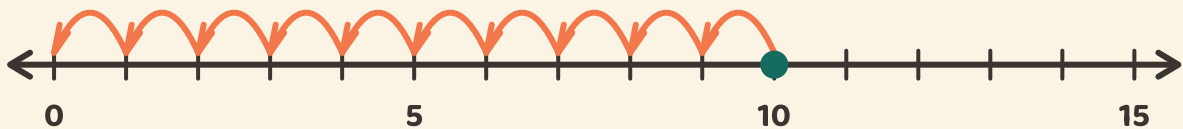
$$6 \div 3 = \square$$

2



$$20 \div 4 = \square$$

3



$$10 \div 5 = \square$$