

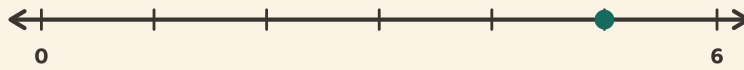
Fractions sur la ligne

Prénom: _____ Date: _____

★ Le point marque une fraction. Entoure laquelle.

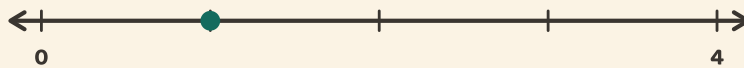
1

0 → 1 in 6 steps



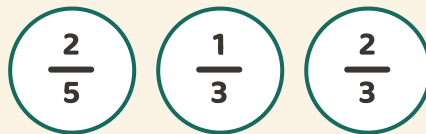
2

0 → 1 in 4 steps



3

0 → 1 in 3 steps



4

0 → 1 in 6 steps

