


Axe de symétrie ?


Prénom: _____ Date: _____

★ La ligne en pointillés est-elle un axe de symétrie ? Entoure la coche ou la croix.


1



2



3



4

