


Le tour du contour

Prénom: _____ Date: _____




Compte les unités autour de chaque rectangle. Écris le périmètre.


1



2



3



4

