

Faire l'équilibre

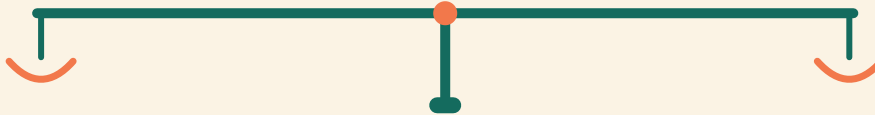
Prénom: _____ Date: _____

★ Les deux côtés doivent peser pareil. Écris le nombre manquant.

1

$2 + 10$

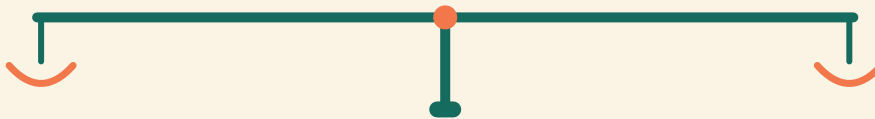
$4 + \square$



2

$16 + 2$

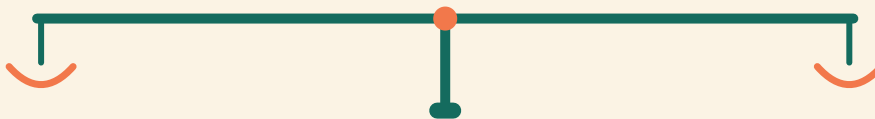
$4 + \square$



3

$17 + 2$

$12 + \square$



4

$9 + 4$

$10 + \square$

