


# Additionner encore

Prénom: \_\_\_\_\_ Date: \_\_\_\_\_




Chaque anneau contient la même quantité. Termine l'addition.

1



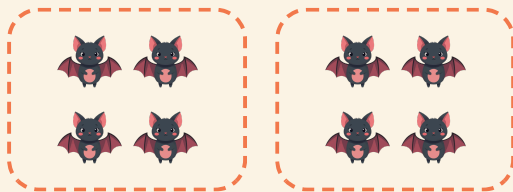
$$4 + 4 = \square$$

2




$$2 + 2 + 2 + 2 = \square$$

3



$$4 + 4 = \square$$

4



$$3 + 3 = \square$$