

De l'addition au produit

Prénom: _____ Date: _____


★ Compte les groupes égaux. Finis la multiplication.

1




$$2 \times 2 = \square$$

2




$$3 \times 3 = \square$$

3



$$4 \times 2 = \square$$

4



$$2 \times 2 = \square$$