


# Combien de groupes ?

Prénom: \_\_\_\_\_ Date: \_\_\_\_\_


★ Les anneaux forment des groupes égaux. Écris combien il y a de groupes.

1




$$12 \div 4 = \square$$

2




$$4 \div 2 = \square$$

3



$$8 \div 4 = \square$$

4



$$12 \div 4 = \square$$