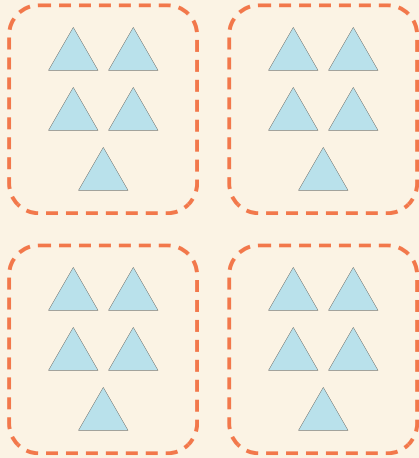


Groupes faciles

Prénom: _____ Date: _____

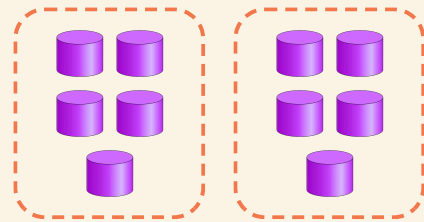
★ Compte les groupes égaux. Finis la multiplication.

1



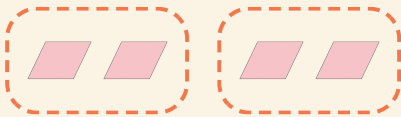
$$4 \times 5 = \square$$

2



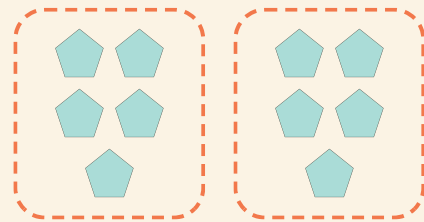
$$2 \times 5 = \square$$

3



$$2 \times 2 = \square$$

4



$$2 \times 5 = \square$$