


Partager équitablement

Prénom: _____ Date: _____


★ Partage le tas également dans les bacs. Écris combien chacun reçoit.

1




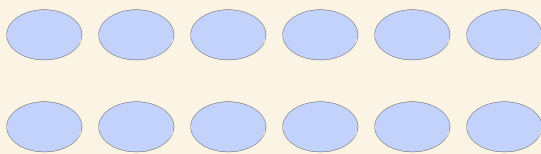
$$10 \div 2 = \square$$

2




$$20 \div 4 = \square$$

3



$$12 \div 3 = \square$$

4



$$4 \div 2 = \square$$