


De l'addition au produit

Prénom: _____ Date: _____


★ Compte les groupes égaux. Finis la multiplication.

1




$$3 \times 4 = \square$$

2




$$4 \times 3 = \square$$

3



$$3 \times 2 = \square$$

4



$$3 \times 2 = \square$$