


Lignes et colonnes

Prénom: _____ Date: _____


★ Compte les lignes et les colonnes. Finis la multiplication.

1



$4 \times 3 = \square$

2




$4 \times 6 = \square$

3



$3 \times 3 = \square$

4



$2 \times 5 = \square$