


Combien de groupes ?

Prénom: _____ Date: _____

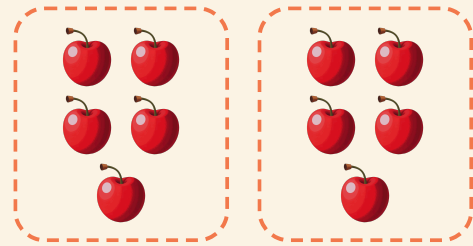
★ Les anneaux forment des groupes égaux. Écris combien il y a de groupes.

1




$$20 \div 5 = \square$$

2




$$10 \div 5 = \square$$

3



$$12 \div 3 = \square$$

4



$$4 \div 2 = \square$$