

Diviser le tas

Prénom: _____ Date: _____



★ Partage le tas également dans les bacs. Écris combien chacun reçoit.

1





$$20 \div 4 = \square$$

2




$$8 \div 4 = \square$$

3



$$12 \div 3 = \square$$

4



$$16 \div 4 = \square$$