

Maths des dominos

Prénom: _____ Date: _____


★ Compte les deux côtés du domino. Écris la somme.

1



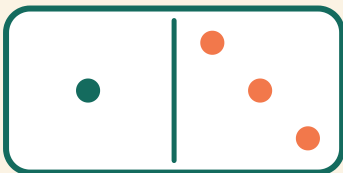
$$6 + 6 = \square$$

2




$$4 + 3 = \square$$

3



$$1 + 3 = \square$$

4



$$2 + 6 = \square$$