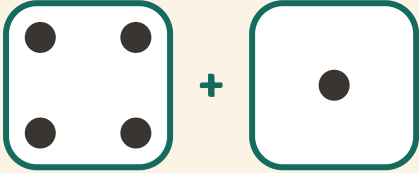


Lancer et additionner

Prénom: _____ Date: _____

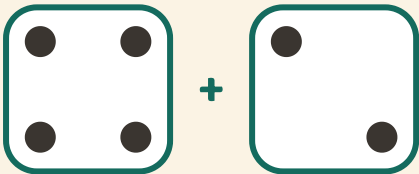
★ Compte les points des deux dés. Écris la somme.

1



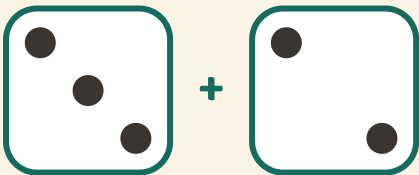
$$4 + 1 = \square$$

2



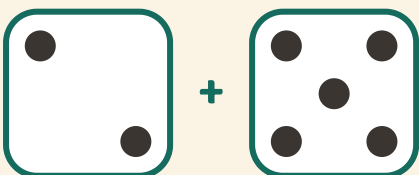
$$4 + 2 = \square$$

3



$$3 + 2 = \square$$

4



$$2 + 5 = \square$$