


Compter les carrés

Prénom: _____ Date: _____


★ Compte les carrés du rectangle. Finis la multiplication.

1




$3 \times 5 = \square$

2




$4 \times 4 = \square$

3



$4 \times 5 = \square$

4



$3 \times 9 = \square$