



Diviser le tas

Prénom: _____ Date: _____


★ Partage le tas également dans les bacs. Écris combien chacun reçoit.

1




$$15 \div 3 = \square$$

2



$$9 \div 3 = \square$$

3



$$20 \div 4 = \square$$

4



$$16 \div 4 = \square$$