


Quante decine?

Nome: _____ Data: _____


★ Conta le barre delle decine. Completa l'operazione.

1



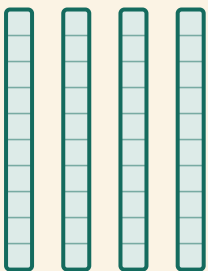
$$\square \times 10 = \square$$

2




$$\square \times 10 = \square$$

3



$$\square \times 10 = \square$$

4



$$\square \times 10 = \square$$