


Forma una decina!

Nome: _____ Data: _____




Cerchia 10 unità per fare una decina. Scrivi quante decine e unità.

1




$$\square \times 10 + \square$$

2



$$\square \times 10 + \square$$

3



$$\square \times 10 + \square$$

4



$$\square \times 10 + \square$$