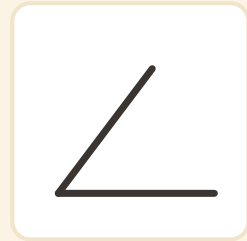
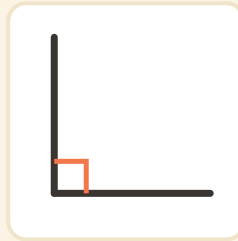
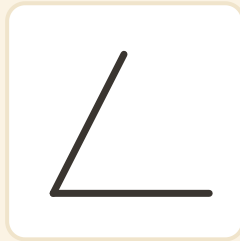
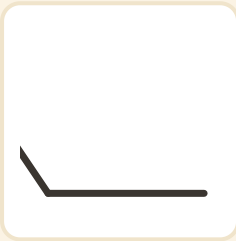


Caccia agli angoli retti

Nome: _____ Data: _____

 Cerchia ogni angolo RETTO (quelli con il quadratino).

1



2

