

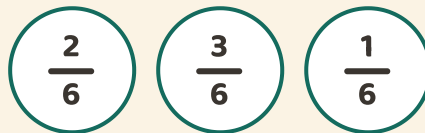
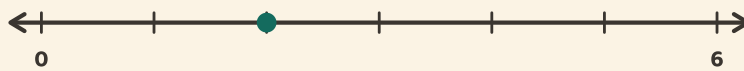
# Frazioni sulla linea

Nome: \_\_\_\_\_ Data: \_\_\_\_\_

★ Il puntino segna una frazione. Cerchia quale.

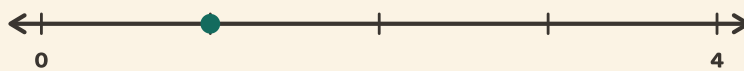
1

0 → 1 in 6 steps




2

0 → 1 in 4 steps



3

0 → 1 in 3 steps



4

0 → 1 in 4 steps

