






























Leggi l'ideogramma

Nome: _____ Data: _____

★ Conta le immagini in ogni fila. Scrivi i numeri.

	=	<input type="text"/>
	=	<input type="text"/>
	=	<input type="text"/>
	=	<input type="text"/>