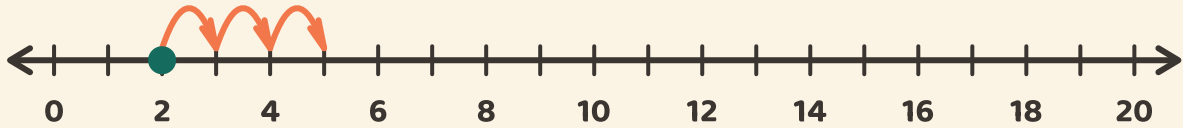


# Salta sulla linea!

Nome: \_\_\_\_\_ Data: \_\_\_\_\_

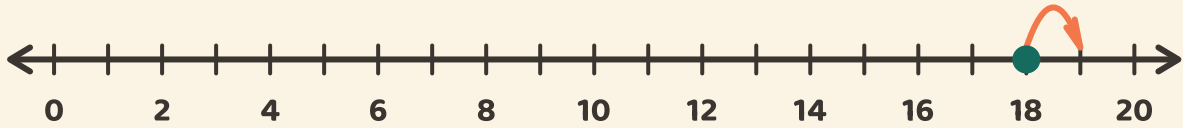
★ Parti dal puntino. Conta i salti. Scrivi il risultato dell'addizione.

1



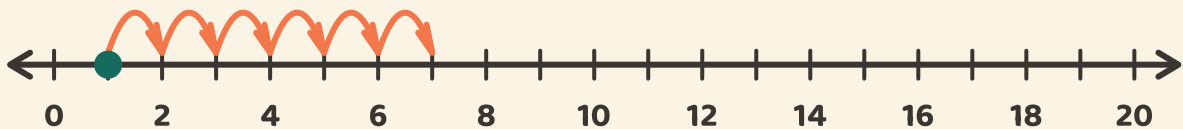
$$2 + 3 = \boxed{\phantom{00}}$$

2



$$18 + 1 = \boxed{\phantom{00}}$$

3



$$1 + 6 = \boxed{\phantom{00}}$$