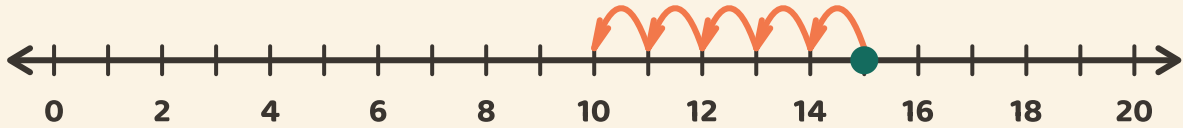


Salta indietro e sottrai

Nome: _____ Data: _____

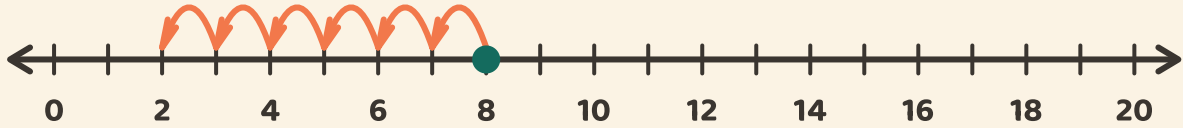
★ Segui i salti all'indietro. Scrivi il risultato della sottrazione.

1



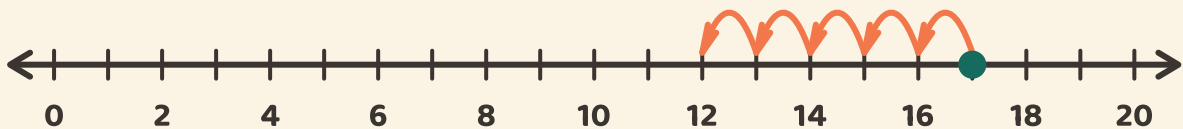
$$15 - 5 = \boxed{}$$

2



$$8 - 6 = \boxed{}$$

3



$$17 - 5 = \boxed{}$$