

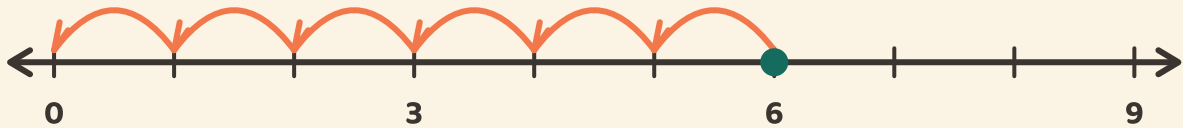
Salta giù fino a zero

Nome: _____ Data: _____



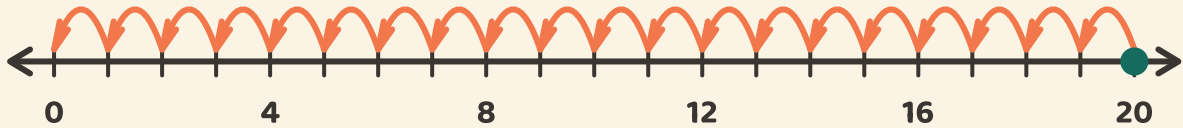
Conta i salti uguali fino a zero. Scrivi quanti salti servono.

1



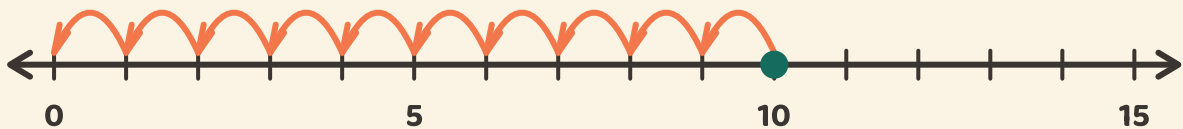
$$6 \div 3 = \boxed{}$$

2



$$20 \div 4 = \boxed{}$$

3



$$10 \div 5 = \boxed{}$$