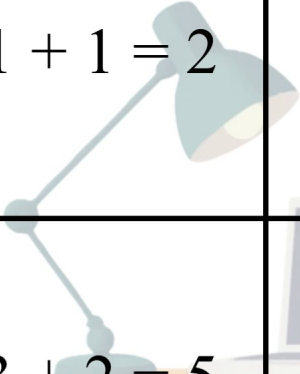




Rompicapi Matematici

Risolvi i rompicapi con le immagini!

| | | |
|--|--|---|
|  $1 + 1 = 2$ | $6 - 3 = 3$ | $1 + 3 = 4$ |
| $3 + 2 = 5$ |  $4 + 5 = 9$ |  $1 + 7 = 8$ |
| $19 - 13 = 6$ | $15 - 8 = 7$ | $15 - 5 = 10$ |