


Addiziona di nuovo

Nome: _____ Data: _____


★ Ogni cerchio ha la stessa quantità. Completa l'addizione.

1



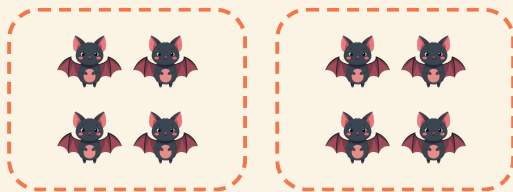
$$4 + 4 = \square$$

2




$$2 + 2 + 2 + 2 = \square$$

3



$$4 + 4 = \square$$

4



$$3 + 3 = \square$$